


ESCOLA _____

NOME: _____ DATA: ____ / ____ / ____



Resolva as operações e descubra quem está nas janelas.

A CASA



$$\begin{array}{r} 642 \\ + 32 \\ \hline \end{array}$$

$$\begin{array}{r} 233 \\ + 217 \\ \hline \end{array}$$

$$\begin{array}{r} 175 \\ + 107 \\ \hline \end{array}$$

$$\begin{array}{r} 978 \\ - 432 \\ \hline \end{array}$$

$$\begin{array}{r} 885 \\ - 241 \\ \hline \end{array}$$



$$\begin{array}{r} 328 \\ \times 3 \\ \hline \end{array}$$

$$\begin{array}{r} 485 \\ \times 2 \\ \hline \end{array}$$

$$812 \overline{) 4}$$

$$246 \overline{) 3}$$






ESCOLA _____

NOME: _____ DATA: ____ / ____ / ____





A CASA

Resolva as operações e descubra quem está nas janelas.



98.580 	1.022 	4.620 
3.216 	282 	1.888 
124 	2.161 	8.512 



98.580 	1.022 	4.620 
3.216 	282 	1.888 
124 	2.161 	8.512 

ATENÇÃO!!

As folhas 1 e 2 são para o 3º ano.

As folhas 3 e 4 são para o 4º e 5º ano.

Visite nossos sites

<https://www.sosprofessor-atividades.com.br/>

<https://br.pinterest.com/betasobeta/sosprofessor-atividades/>

<https://www.facebook.com/sosprofessoratividades/>

<https://www.instagram.com/sosprofessoratividades/>



https://www.youtube.com/channel/UCxN9wo1jE1txew9bzd_058A?view_as=subscriber

Clipart licenciado: Finch Family Games

Produção SOSprofessor-atividades

