

NOME: _____



TURMA: _____ DATA: ____/____/____




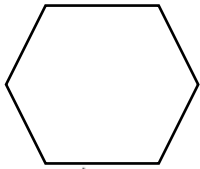


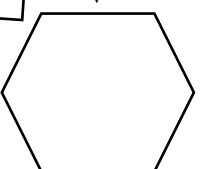



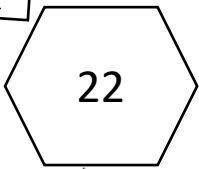


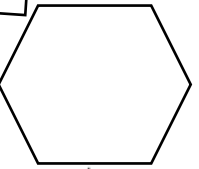

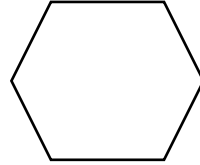


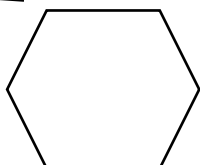



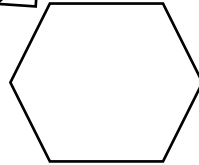


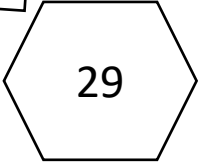
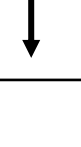
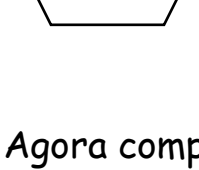

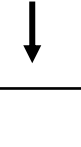
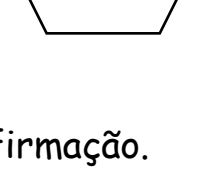


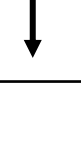


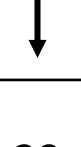





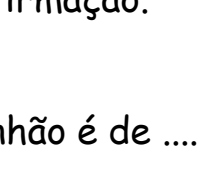







@sosprofessoratividades.com

DE OLHO NOS COELHOS

Cada coelhinho tem um salto diferente.

Léo  salta de 2 em 2. Pimpo  salta de 5 em 5.

Complete os hexágonos e descubra de quanto é o salto do Tonhão 

 ↓ 	 →	 ↓ 	 ↘	 →	 ↓ 	 ↘	 ↓ 
 ↓ 	 →	 ↓ 	 ↘	 →	 ↓ 	 ↘	 ↓ 
 ↓ 	 →	 ↓ 	 ↘	 →	 ↓ 	 ↘	 ↓ 
 ↓ 	 →	 ↓ 	 ↘	 →	 ↓ 	 ↘	 ↓ 

Agora complete a afirmação.



O salto do Tonhão é de em



NOME: _____



TURMA: _____ DATA: ____/____/____




























@sosprofessoratividades.com

De olho nos coelhos

Cada coelhinho tem um salto diferente.

Léo  salta de 2 em 2. Pimpo  salta de 5 em 5.

Complete os hexágonos e descubra de quanto é o salto do Tonhão 

 10	 →	15	 →	20	 →	25
 ↓	 ↘	 ↓	 ↘	 ↓	 ↘	 ↓
12	 →	17	 →	22	 →	27
 ↓	 ↘	 ↓	 ↘	 ↓	 ↘	 ↓
14	 →	19	 →	24	 →	29

Agora complete a afirmação.



O salto do Tonhão é de em



Visite nossos sites



<https://sosprofessoratividades.com>



<https://br.pinterest.com/betasobeta/sosprofessoratividades/>



<https://www.facebook.com/sosprofessoratividades/>



<https://www.instagram.com/sosprofessoratividades/>

https://www.youtube.com/channel/UCxN9wo1jE1txew9bzd_058A?view_as=subscriber



Produção: sosprofessoratividades.com

Este material é totalmente gratuito e elaborado por @sosprofessoratividades.com. Todas as atividades do blog/site são protegidas pela lei dos direitos autorais, nº 9.610/98 - proibido cópias para outros sites, blogs ou redes sociais.

